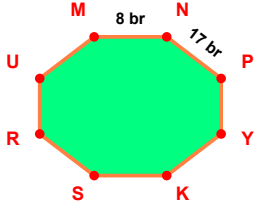
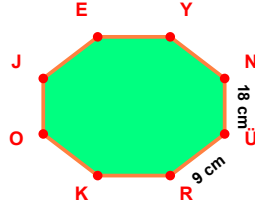


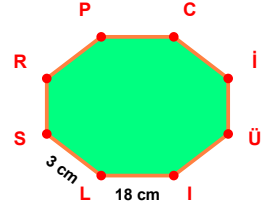
SORU: Aşağıdaki şekillerde verilen, kenar uzunlukları farklarını bulunuz.



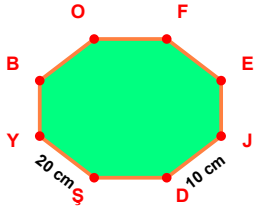
$$|NP| - |MN| = \dots\dots$$



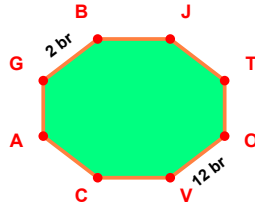
$$|NÜ| - |ÜR| = \dots\dots$$



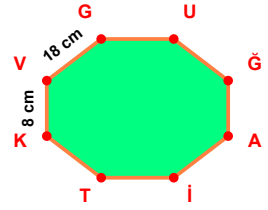
$$|IL| - |LS| = \dots\dots$$



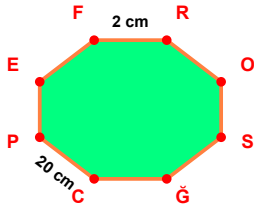
$$|ŞY| - |JD| = \dots\dots$$



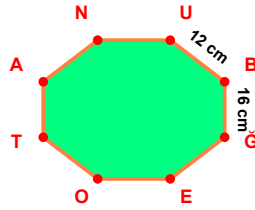
$$|OV| - |GB| = \dots\dots$$



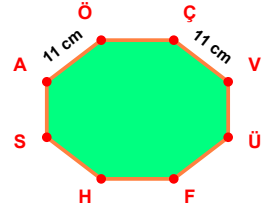
$$|VG| - |KV| = \dots\dots$$



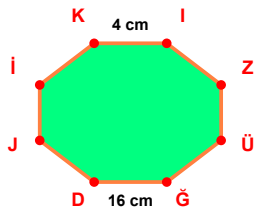
$$|CP| - |FR| = \dots\dots$$



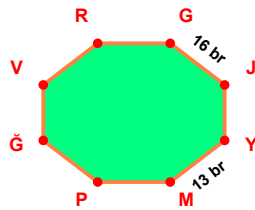
$$|BĞ| - |UB| = \dots\dots$$



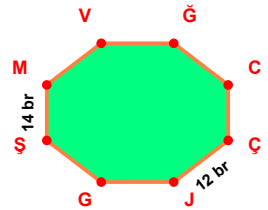
$$|AÖ| - |ÇV| = \dots\dots$$



$$|ĞD| - |KI| = \dots\dots$$

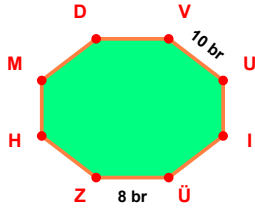


$$|GJ| - |YM| = \dots\dots$$

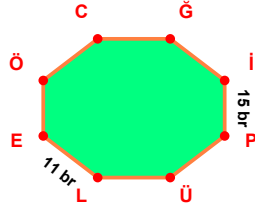


$$|ŞM| - |ÇJ| = \dots\dots$$

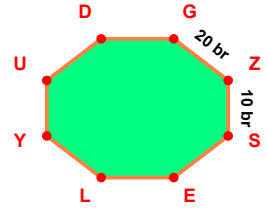
SORU: Aşağıdaki şekillerde verilen, kenar uzunlukları farklarını bulunuz.



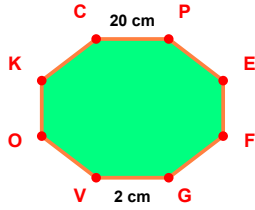
$$|VU| - |ÜZ| = \dots\dots$$



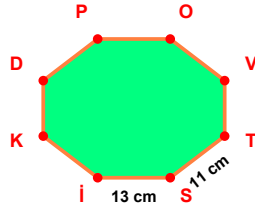
$$|İP| - |LE| = \dots\dots$$



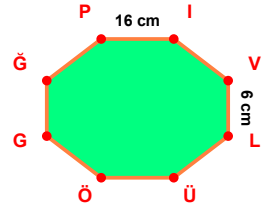
$$|GZ| - |ZS| = \dots\dots$$



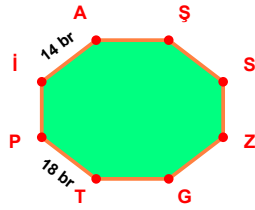
$$|CP| - |GV| = \dots\dots$$



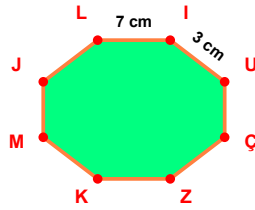
$$|Sİ| - |TS| = \dots\dots$$



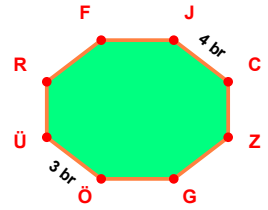
$$|Pİ| - |VL| = \dots\dots$$



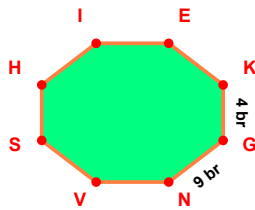
$$|TP| - |İA| = \dots\dots$$



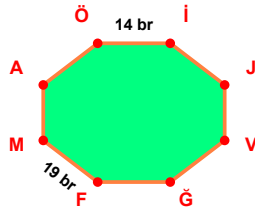
$$|LI| - |İU| = \dots\dots$$



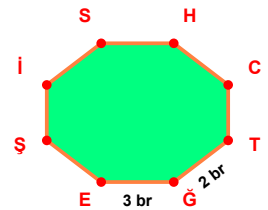
$$|JC| - |ÜÖ| = \dots\dots$$



$$|GN| - |KG| = \dots\dots$$



$$|FM| - |Öİ| = \dots\dots$$



$$|GE| - |TĞ| = \dots\dots$$

SÜREÇ ODAKLI DEĞERLENDİRME ÖLÇEĞİ

Doğru Sayısı: / 24

Öğretmen ilgili kutucuğu işaretler.

Geliştirilmeli (0-8)

İyi (9-14)

Çok İyi (15-20)

Mükemmel (21-24)



Hazırlayan:

Bu bölüme sınıfınızın ilgili kazanıma yönelik genel durumuna ilişkin gözlem ve izlenimlerinizi, öğrencilerinizin bu kazanımla ilgili öğrenme eksikliklerini ve bu eksikliklerin giderilmesi amacıyla yaptığınız/yapmayı planladığınız faaliyetleri not edebilirsiniz.

No	Adı - Soyadı	Toplam Puan	Değerlendirme
1			
2			
3			
4			
5			
6			
7			
8			
9			
10			
11			
12			
13			
14			
15			
16			
17			
18			
19			
20			
21			
22			
23			
24			
25			
26			
27			
28			
29			
30			
31			
32			
33			
34			
35			

Hazırlayan: